





# KS1 2D Shape Challenge Cards

Here are a series of of challenge cards to help children learn about 2D shapes! Perfect for children aged 5–7. Use as a pair game, as a morning activity, for home learning or as a maths intervention.

## 2D Shape Challenge Cards

<p>● Shape Challenge Cards</p>  <p>What is this shape called? How many sides does it have? How many lines of symmetry does it have? How many edges does it have?</p> 	<p>● Shape Challenge Cards</p>  <p>What is this shape called? How many sides does it have? How many lines of symmetry does it have? How many edges does it have?</p> 
--	--

# 2D Shape Challenge Cards

## Shape Challenge Cards




**What is this shape called?  
How many sides does it  
have? How many lines of  
symmetry does it have?  
How many edges does it  
have?**

## Shape Challenge Cards




**What is this shape called?  
How many sides does it  
have? How many lines of  
symmetry does it have?  
How many edges does it  
have?**

## Shape Challenge Cards



**What is this shape called?  
How many sides does it  
have? How many lines of  
symmetry does it have?  
How many edges does it  
have?**


## Shape Challenge Cards



**What is this shape called?  
How many sides does it  
have? How many lines of  
symmetry does it have?  
How many edges does it  
have?**


# 2D Shape Challenge Cards

## Shape Challenge Cards




What is this shape called?  
How many sides does it have? How many lines of symmetry does it have?  
How many edges does it have?

## Shape Challenge Cards



What is this shape called?  
How many sides does it have? How many lines of symmetry does it have?  
How many edges does it have?

## Shape Challenge Cards



What is this shape called?  
How many sides does it have? How many lines of symmetry does it have?  
How many edges does it have?

