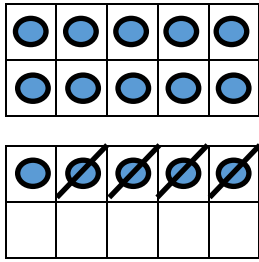
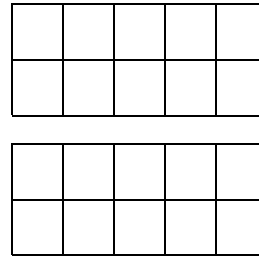



Draw the counters on the ten frames and cross out to complete.




$$15 - 4 = 11$$




$$15 - 5 =$$




$$17 - 5 =$$




$$17 - 4 =$$




$$12 - 1 =$$




$$19 - 7 =$$




$$16 - 4 =$$



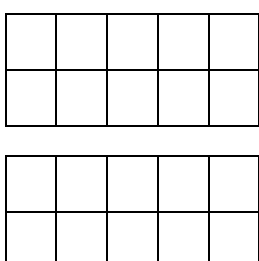
$$20 - 6 =$$



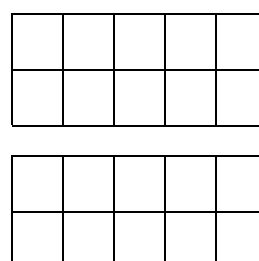
$$19 - 3 =$$



$$15 - 3 = 11$$



$$18 - 6 =$$



$$18 - 7 =$$