

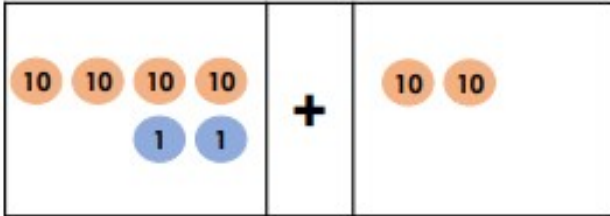
Year 2 Maths – Monday and Tuesday

You can use pasta to represent tens and something small like buttons to represent ones.

Add and Subtract 10s

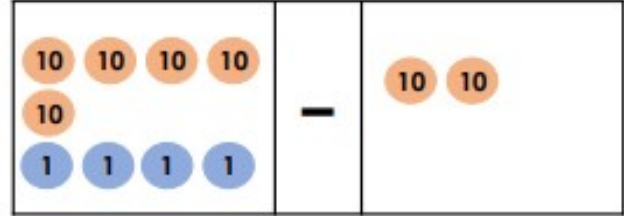
Add and Subtract 10s

1a. Complete the calculation.



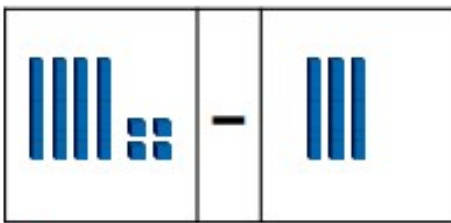
VF

1b. Complete the calculation.



VF

2a. Choose the correct answer from the options below to complete the calculation.



10

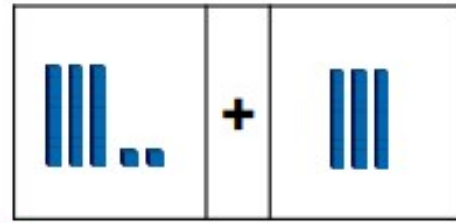
14

74



VF

2b. Choose the correct answer from the options below to complete the calculation.



62

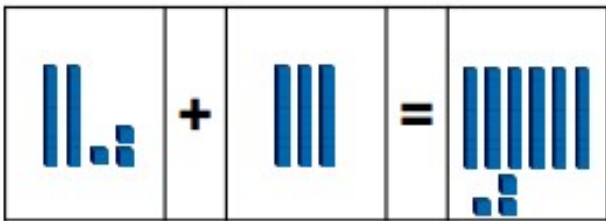
12

60



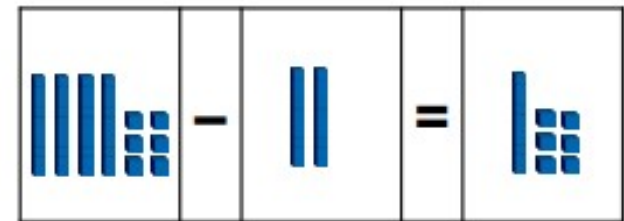
VF

3a. Add the remaining Base 10 to make this calculation correct.



VF

3b. Add the remaining Base 10 to make this calculation correct.



VF

4a. Holly had 52 flowers. She gave 30 away. Arrange the counters to show the correct calculation.



VF

4b. Mohammed had 24 toy cars. He bought 30 more. Arrange the counters to show the correct calculation.



VF