

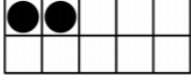
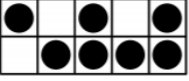
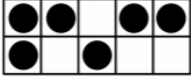


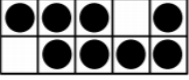
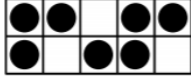
LO: I can count and write numbers to 20.

Write the numerals shown on the tens frame.

a  Number _____ Word _____

b   Number _____ Word _____

c   Number _____ Word _____

d   Number _____ Word _____

Complete the missing numbers on the number track.

a

9		11		13
---	--	----	--	----

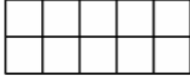
b


zero			three		five
------	--	--	-------	--	------

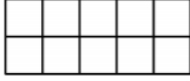
c

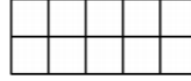
12					17	
----	--	--	--	--	----	--

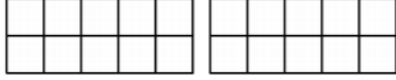
Draw counters to represent the following numbers on the tens frame.


a  5

e  Six

b  Nine

f  10

c  15

d  Seventeen