

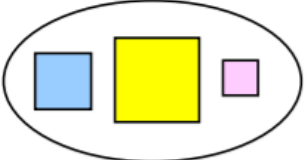
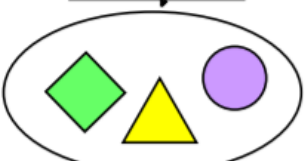
LO: I can sort 2D shapes.

How are the shapes grouped?

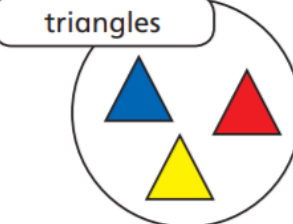
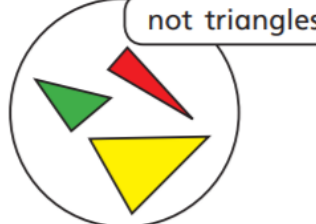
Label each group

a	
b	
c	

The following shapes have been sorted into two groups.

<p>Squares</p> 	<p>Have the shapes been sorted correctly?</p>
<p>Not squares</p> 	<p>Explain how you know.</p> <hr/> <hr/> <hr/> <hr/>

Eva has sorted some shapes.

<p>triangles</p> 	<p>not triangles</p> 
-------------------------------------------------------------------------------------------------------	-----------------------------------------------------------------------------------------------------------

a) Is Eva correct? Can you explain your answer?

b) Draw a shape that is not a triangle.

