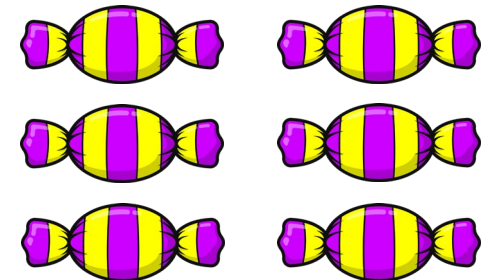





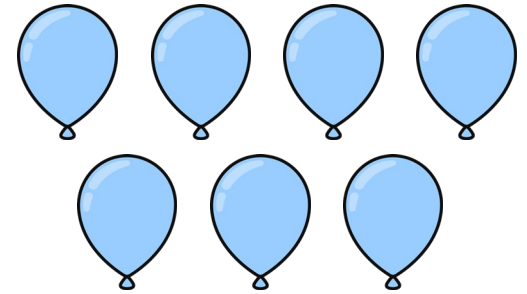





# Investigation – Subtraction

Create subtraction calculations that will give you the answers below. How many different calculations can you make?




# Answers - Investigation – Subtraction

Create subtraction calculations that will give you the answers below. How many different calculations can you make?



9

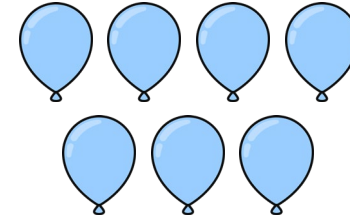
20 - 11  
19 - 10  
18 - 9  
17 - 8  
16 - 7  
15 - 6  
14 - 5  
13 - 4  
12 - 3  
11 - 2  
10 - 1  
9 - 0



3

20 - 17  
19 - 16  
18 - 15  
17 - 14  
16 - 13  
15 - 12  
14 - 11  
13 - 10  
12 - 9  
11 - 8  
10 - 7


9 - 6  
8 - 5  
7 - 4  
6 - 3  
5 - 2  
4 - 1  
3 - 0



7

20 - 13  
19 - 12  
18 - 11  
17 - 10  
16 - 9  
15 - 8  
14 - 7  
13 - 6  
12 - 5  
11 - 4  
10 - 3


9 - 2  
8 - 1  
7 - 0



1

20 - 19  
19 - 18  
18 - 17  
17 - 16  
16 - 15  
15 - 14  
14 - 13  
13 - 12  
12 - 11  
11 - 10  
10 - 9


9 - 8  
8 - 7  
7 - 6  
6 - 5  
5 - 4  
4 - 3  
3 - 2  
2 - 1  
1 - 0



5

20 - 15  
19 - 14  
18 - 13  
17 - 12  
16 - 11  
15 - 10  
14 - 9  
13 - 8  
12 - 7  
11 - 6  
10 - 5


9 - 4  
8 - 3  
7 - 2  
6 - 1  
5 - 0



2

20 - 18  
19 - 17  
18 - 16  
17 - 15  
16 - 14  
15 - 13  
14 - 12  
13 - 11  
12 - 10  
11 - 9  
10 - 8


9 - 7  
8 - 6  
7 - 5  
6 - 4  
5 - 3  
4 - 2  
3 - 1  
2 - 0



4

20 - 16  
19 - 15  
18 - 14  
17 - 13  
16 - 12  
15 - 11  
14 - 10  
13 - 9  
12 - 8  
11 - 7  
10 - 6

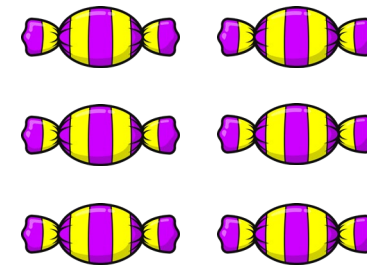
9 - 5  
8 - 4  
7 - 3  
6 - 2  
5 - 1  
4 - 0



8

20 - 12  
19 - 11  
18 - 10  
17 - 9  
16 - 8  
15 - 7  
14 - 6  
13 - 5  
12 - 4  
11 - 3  
10 - 2  
9 - 1

8 - 0



6

20 - 14  
19 - 13  
18 - 12  
17 - 11  
16 - 10  
15 - 9  
14 - 8  
13 - 7  
12 - 6  
11 - 5  
10 - 4

9 - 3  
8 - 2  
7 - 1  
6 - 0