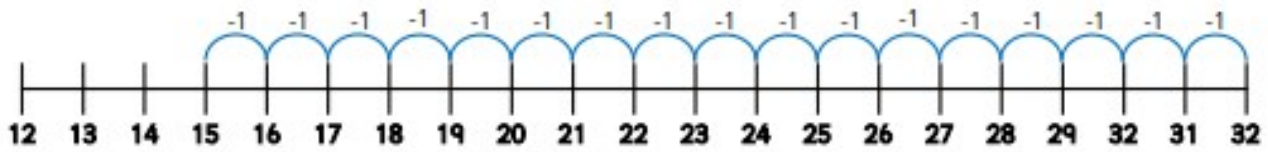


Subtract with 2-digits (2)




Show each subtraction calculation on the number line.

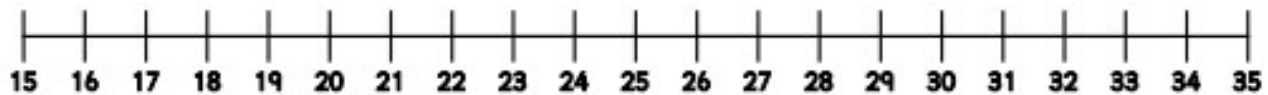
Example: $32 - 17 = 15$



a $41 - 12 = \underline{\quad}$



b $35 - 19 = \underline{\quad}$



c $54 - 16 = \underline{\quad}$



d $63 - 17 = \underline{\quad}$



e $75 - 18 = \underline{\quad}$



f $82 - 15 = \underline{\quad}$

