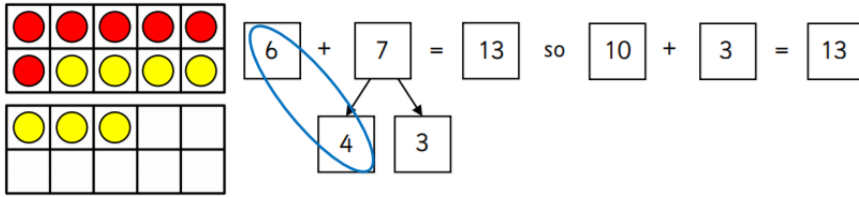


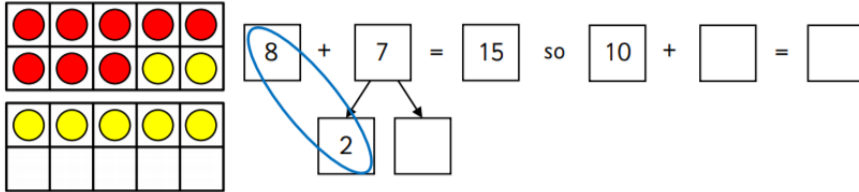
LO: I can add by making 10.

Use the tens frames and part-whole models to find the total. The first one has been completed

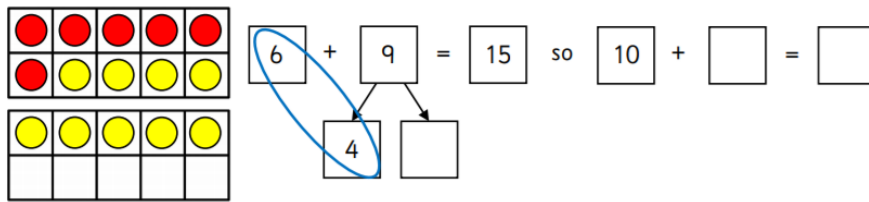
Asha has 6 sweets. She gets 7 more.
How many altogether?



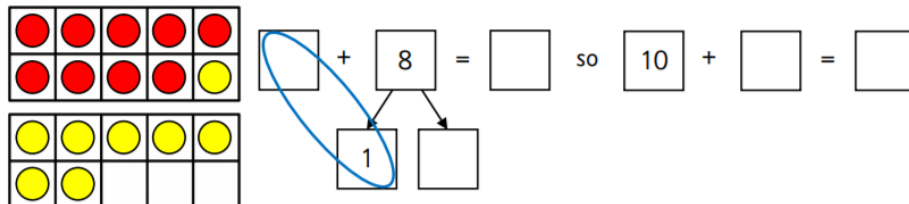
Dom has 8 cookies. He gets 7 more.
How many altogether?



Che has 6 oranges. He gets 9 more.
How many altogether?



Kat has 9 pens. She gets 8 more.
How many altogether?



Dom has 2 bananas. He gets 9 more.
How many altogether?

